

5 problems for 100 pts**Problem #1: General Knowledge (25 pts)**

(a) Electronics (4 pts): Choose true or false for each of the following statements. **If you choose false, then provide the correct statement.**

- (i) If an instrumentation amplifier has $A_d = 500$ and $\text{CMRR} = 90 \text{ dB}$, then its common-mode gain is $A_{\text{CM}} = 0.16$.
- (ii) Aortic defibrillation is the major cause of death due to electric shock.
- (iii) A microshock can be caused by small capacitively-coupled currents flowing into the body via a catheter.

(b) Temperature (4 pts): Choose true or false for each of the following statements. **If you choose false, then provide the correct statement.**

- (i) Temporal artery thermometry measures the amount of ultraviolet rays reflected from the temporal artery.
- (ii) The Seacrest effect produces a small current difference to appear between the hot and cold end of a metal wire.
- (iii) The Steinway-Bort equation determines the relationship between thermocouple resistance and temperature.

(c) ECG (4 pts): Choose true or false for each of the following statements. **If you choose false, then provide the correct statement.**

- (i) The repolarization phase of an action potential involves an influx of potassium ions into the axon.
- (ii) The electrical signal that stimulates the ventricles is delayed by the Schwann-Purkinje node, thereby ensuring the upper and lower vehicles depolarize after the front and back alveoli.
- (iii) For ECG electrodes, the oxidation of adamantium ions and association of dilithium sulfide are responsible for current flowing out of the body.

(d) Circulation (4 pts): Choose true or false for each of the following statements. **If you choose false, then provide the correct statement.**

- (i) In the auscultatory method, diastole is the pressure corresponding to the fourth Beethoven sound.
- (ii) A systolic pressure of 2 psi is indicative of hypertension.
- (iii) Given a cardiac output of 5.8 L/min and a stroke volume of 80 mL, the corresponding heart rate is 1.5 beats per second.

(e) Respiration (4 pts): Choose true or false for each of the following statements. **If you choose false, then provide the correct statement.**

- (i) Emphysema is an example of an obstructive disease.
- (ii) The absolute lung volume after maximum inhalation is called inspiratory reserve capacity.
- (iii) Whole-body plethysmography uses Avogadro's Law to measure forensic reserve characteristic (FRC).

(f) Medical imaging (5 pts): Choose true or false for each of the following statements. **If you choose false, then provide the correct statement.**

- (i) Indium is a common x-ray contrast agent for angiography.
- (ii) In MRI, the primary magnet is a coil of copper wire cooled by dry ice.
- (iii) Cubic zirconia titanate is a common pyrotechnic material used for medical ultrasound transducers .
- (iv) X-ray detection involves a two-step process involving a fluorescent layer on top of a photodetector array.

Problem #2: Medical Device Regulation (15 pts)

(a) FDA (5 pts): Choose true or false for each of the following statements. **If you choose false, then provide the correct statement.**

- (i) The Center for Biologics Evaluation and Research (CBER) oversees devices related to urine testing.
- (ii) A device recall is issued by the FDA and does not have to be in consultation with the manufacturer.
- (iii) The Medical Device Amendments of 1985 established the first recall requirements for devices.
- (iv) The Center for Gizmos and Perpetual Health (CGPH) is the FDA branch that oversees device regulation.

(b) Premarket (5 pts): Choose true or false for each of the following statements. **If you choose false, then provide the correct statement.**

- (i) A device receives FDA clearance if it is shown to be substantially equivalent to a device before 1985.
- (ii) A premarket notification, also called a 403(b), applies mostly to low risk devices.
- (iii) The three device classifications (Class A, B, and C) are based on anticipated cost of the device.
- (iv) In order to obtain FDA approval, a manufacturer must submit a premarket application (PMA).

(c) Postmarket (5 pts): Choose true or false for each of the following statements. **If you choose false, then provide the correct statement.**

- (i) The FDA provides manufacturers with a detailed list of manufacturing procedures that is customized to each device that receives clearance or approval.
- (ii) Proper labeling includes pamphlets, posters, and brochures about the marketed device.
- (iii) The production of any FDA cleared or approved device must follow the General Manufacturing Protocol (GMP).
- (iv) Medical Device Reporting (MDR) regulations require user facilities to report device problems to the FDA and manufacturer within 10 work days of the event.

Problem #3: Temperature (20 pts)

A chemistry experiment requires a temperature measurement system operating from $T = 20$ to 50°C . The sensitivity must be better than 0.02°C at 50°C . Furthermore, self-heating must be small enough that $\Delta T_{\text{SELF}} \leq 0.5 \Delta T_{\text{MIN}}$ at 50°C .

- You decide to use a thermistor R_T driven by a constant current source $I_S = 150 \mu\text{A}$.

NOTE: This means the current through R_T is always the same value.

- An identical current source drives a 1 kohm resistor.

- Two amplifiers are available: $A_d = 10$ ($V_N = 300 \mu\text{V}$) and $A_d = 50$ ($V_N = 1.5 \text{ mV}$).

- Both amplifiers have $V_{\text{ref}} = 3\text{V}$.
- Assume the maximum amplifier outputs are 1V less than the power supplies.

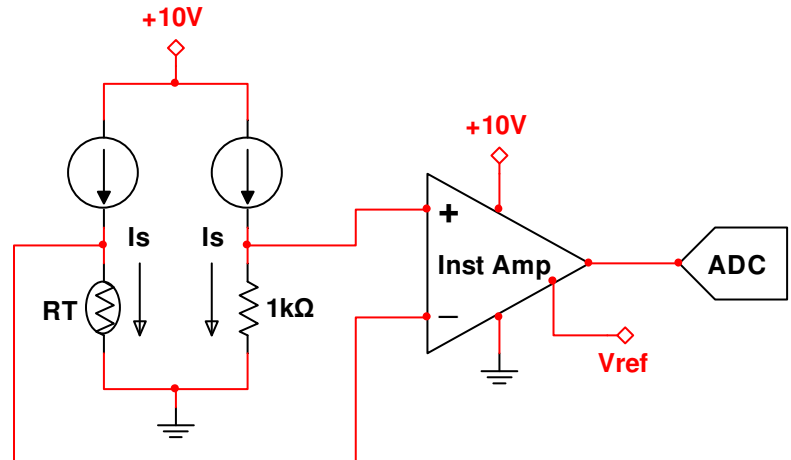
- The ADC operates from 0 to 10V with 14 bits.
- The 1 kohm thermistor (see table) has a dissipation coefficient of $2 \text{ mW}/^\circ\text{C}$.

- a) **Are all the design specs satisfied using one, both, or none of the amplifiers?** Show all work! You must be VERY CLEAR about why an amplifier works or does not work.

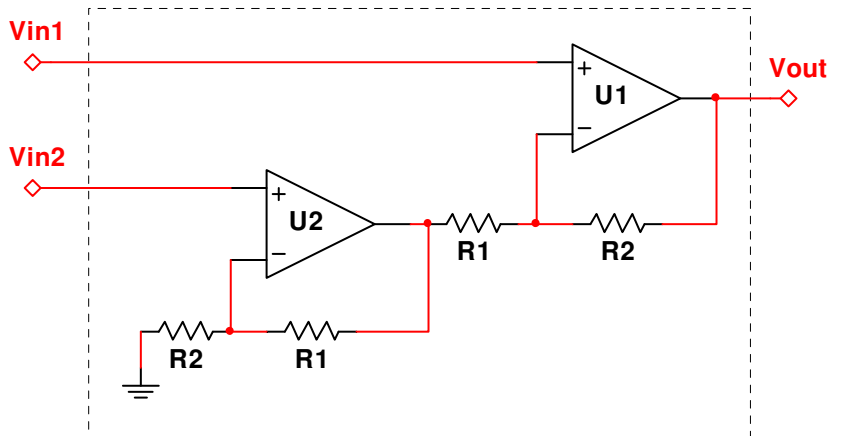
- b) Suppose there is a worldwide shortage of instrumentation amplifier chips. ☹ Fortunately, two op-amps can form an instrumentation amplifier with very high input impedance and good CMRR. **Use the Golden Rules to show that:**

$$V_{\text{OUT}} = \left(1 + \frac{R_2}{R_1}\right) (V_{\text{in1}} - V_{\text{in2}})$$

Show all work!



Temp	R_T (ohm)	Tempco ($\%/^\circ\text{C}$)
20°C	1217	-3.99
25°C	1000	-3.87
50°C	407	-3.32

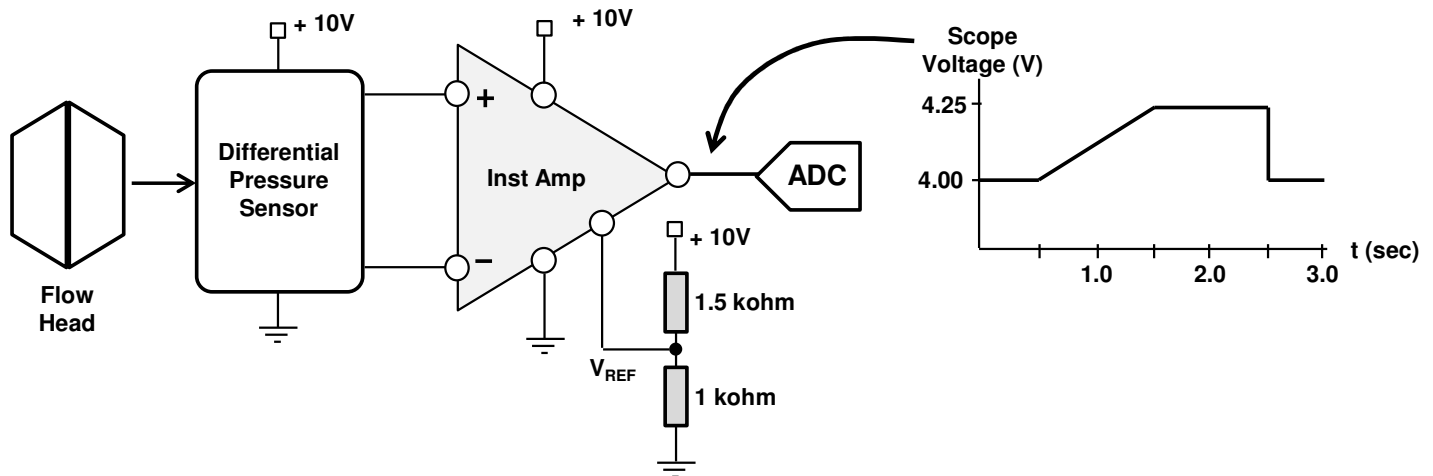


(extra sheet for work)

(extra sheet for work)

Problem #4: Spirometer (20 pts)

You must design a flow spirometer system to measure a maximum flow of $+F_{\text{MAX}} = 25 \text{ L/s}$, $-F_{\text{MAX}} = -5 \text{ L/s}$, and a sensitivity of $\Delta F_{\text{MIN}} = 0.01 \text{ L/s}$. The instrumentation amplifier is powered by 10V and GND, so its output is limited to within 1 V of each power supply. The amplifier has $A_d = 400$ and $V_N = 1 \text{ mV}$. The system is calibrated by injecting 3 liters of air. The scope waveform is shown below.



- You have two ADCs available. ADC #1 has 12 bits from 0-to-10V while ADC #2 has 14 bits from 0-to-5V. Are all design requirements satisfied by one ADC, both ADCs, or neither ADC? Show all work!
- You notice a 4.7 kohm resistor in your pocket. A gift from the heavens? Divine inspiration makes you wonder if the V_{REF} voltage divider needs to be modified. With the appropriate ADC, can all design requirements be satisfied if you replace the lower or upper resistor? You can re-use any relevant calculations from part (a).
- In reality, the instrumentation amplifier has a non-zero common-mode gain A_{CM} . When there is no flow, both amplifier inputs are 5V. This common-mode input adds a slight error ΔF_{error} to the final flow measurement. What is the smallest amplifier CMRR to ensure that $\Delta F_{\text{error}} \leq 0.5 \Delta F_{\text{MIN}}$ of the system? Express your answer in dB. Show all work!

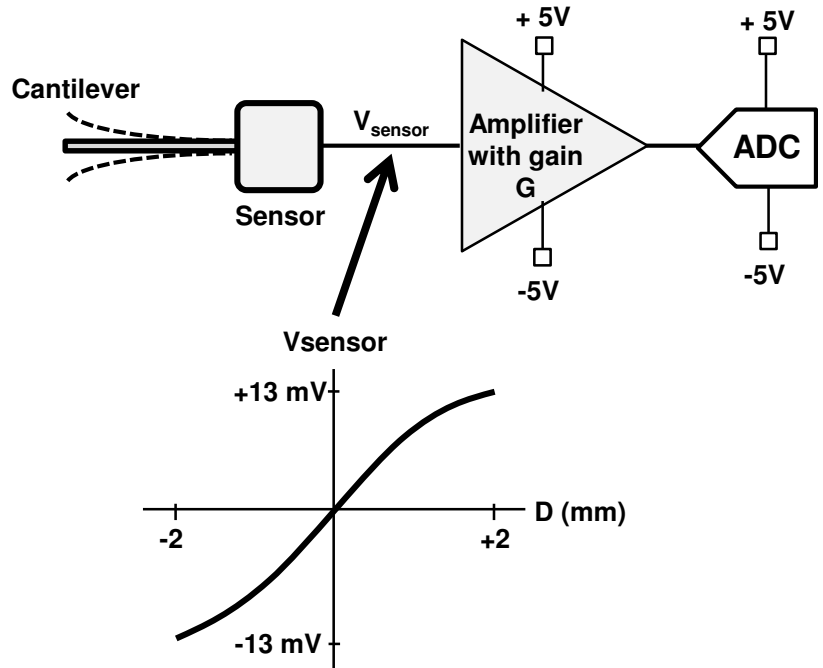
(extra sheet for work)

Problem #5: Vibration Measurement (20 pts)

You are asked to design a system to measure the displacement of a cantilever-type structure. The maximum expected displacement is $D_{\text{MAX}} = \pm 2 \text{ mm}$, and the desired sensitivity is $|\Delta D_{\text{MIN}}| = 2 \text{ }\mu\text{m}$ **over the entire measurement range.**

The sensor calibration curve is nonlinear, and can be fitted with a polynomial equation given by $V_{\text{SENSOR}} = aD - bD^3$, where $a = 8 \text{ mV/mm}$ and $b = 0.4 \text{ mV/mm}^3$.

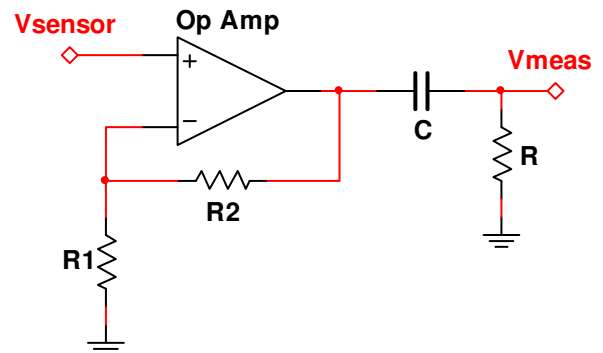
The amplifier is powered by $\pm 5\text{V}$. You can assume the amplifier output is limited to within 1V of each power supply. The ADC operates from -5V to $+5\text{V}$ with 14 bits.



- (a) You must choose between two amplifiers. Amplifier #1 has $G = 300$ and $V_N = 3 \text{ mV}$, while amplifier #2 has $G = 120$ and $V_N = 100 \text{ }\mu\text{V}$. Both amplifiers have $V_{\text{ref}} = 0\text{V}$. Which amplifier produces a system that satisfies all the design requirements? You must also explain why the other amplifier doesn't work.
- (b) Suppose we want to measure vibrations at frequencies over 200 Hz . Use the Golden Rules to show that the op amp circuit shown to the right produces:

$$\frac{V_{\text{meas}}}{V_{\text{sensor}}} = G \frac{jf/f_c}{1 + jf/f_c}$$

NOTE: Clearly define G and f_c !



- (c) At "very high" frequencies, $V_{\text{meas}}/V_{\text{sensor}} \approx G$. Assuming $R_1 = 1 \text{ kohm}$, what is an appropriate value for R_2 to achieve a gain close to your answer to part (a)? Choose a standard 5% resistor (see table on last page).
- (d) Suppose we want $|V_{\text{meas}}/V_{\text{sensor}}|$ to be at least $0.9G$ over the entire frequency range of interest. What is an appropriate value for capacitor C ? Choose a standard 10% capacitor value (see table on last page). Show all work!

(extra sheet for work)

(extra sheet for work)

Standard Resistor Values ($\pm 5\%$)						
1.0	10	100	1.0K	10K	100K	1.0M
1.1	11	110	1.1K	11K	110K	1.1M
1.2	12	120	1.2K	12K	120K	1.2M
1.3	13	130	1.3K	13K	130K	1.3M
1.5	15	150	1.5K	15K	150K	1.5M
1.6	16	160	1.6K	16K	160K	1.6M
1.8	18	180	1.8K	18K	180K	1.8M
2.0	20	200	2.0K	20K	200K	2.0M
2.2	22	220	2.2K	22K	220K	2.2M
2.4	24	240	2.4K	24K	240K	2.4M
2.7	27	270	2.7K	27K	270K	2.7M
3.0	30	300	3.0K	30K	300K	3.0M
3.3	33	330	3.3K	33K	330K	3.3M
3.6	36	360	3.6K	36K	360K	3.6M
3.9	39	390	3.9K	39K	390K	3.9M
4.3	43	430	4.3K	43K	430K	4.3M
4.7	47	470	4.7K	47K	470K	4.7M
5.1	51	510	5.1K	51K	510K	5.1M
5.6	56	560	5.6K	56K	560K	5.6M
6.2	62	620	6.2K	62K	620K	6.2M
6.8	68	680	6.8K	68K	680K	6.8M
7.5	75	750	7.5K	75K	750K	7.5M
8.2	82	820	8.2K	82K	820K	8.2M
9.1	91	910	9.1K	91K	910K	9.1M

Standard Capacitor Values ($\pm 10\%$)						
10pF	100pF	1000pF	.010 μ F	.10 μ F	1.0 μ F	10 μ F
12pF	120pF	1200pF	.012 μ F	.12 μ F	1.2 μ F	
15pF	150pF	1500pF	.015 μ F	.15 μ F	1.5 μ F	
18pF	180pF	1800pF	.018 μ F	.18 μ F	1.8 μ F	
22pF	220pF	2200pF	.022 μ F	.22 μ F	2.2 μ F	22 μ F
27pF	270pF	2700pF	.027 μ F	.27 μ F	2.7 μ F	
33pF	330pF	3300pF	.033 μ F	.33 μ F	3.3 μ F	33 μ F
39pF	390pF	3900pF	.039 μ F	.39 μ F	3.9 μ F	
47pF	470pF	4700pF	.047 μ F	.47 μ F	4.7 μ F	47 μ F
56pF	560pF	5600pF	.056 μ F	.56 μ F	5.6 μ F	
68pF	680pF	6800pF	.068 μ F	.68 μ F	6.8 μ F	
82pF	820pF	8200pF	.082 μ F	.82 μ F	8.2 μ F	